

NAME _____

DATE _____

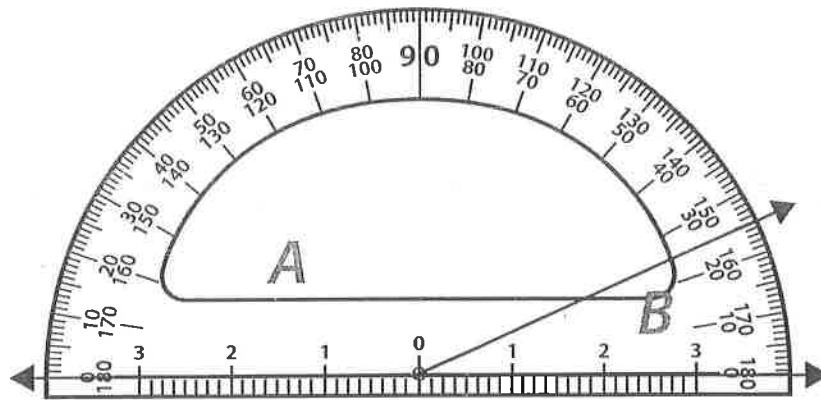


Protractor Practice page 1 of 2

When you measure an angle you usually have to choose between two numbers because protractors are designed to measure angles that start on either the right or left side. There are two angles to measure in each of the problems on this sheet and the next. The angle on the left-hand side is angle A. The angle on the right-hand side is angle B. Find and record the measure of both angles in each problem.

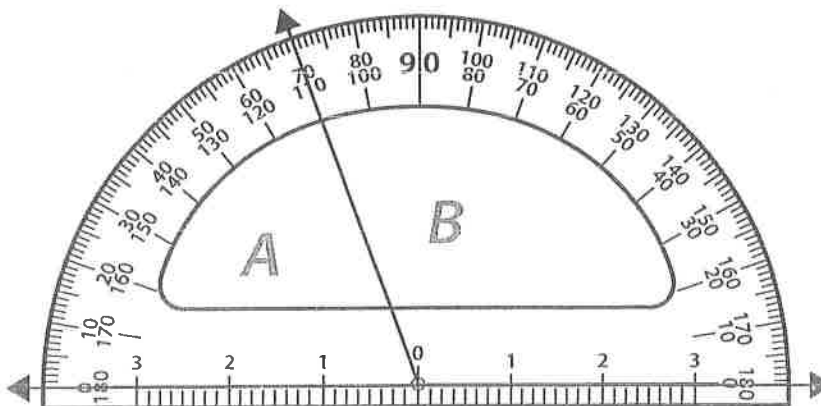
1 The measure of angle A is _____ degrees.

The measure of angle B is _____ degrees.



2 The measure of angle A is _____ degrees.

The measure of angle B is _____ degrees.



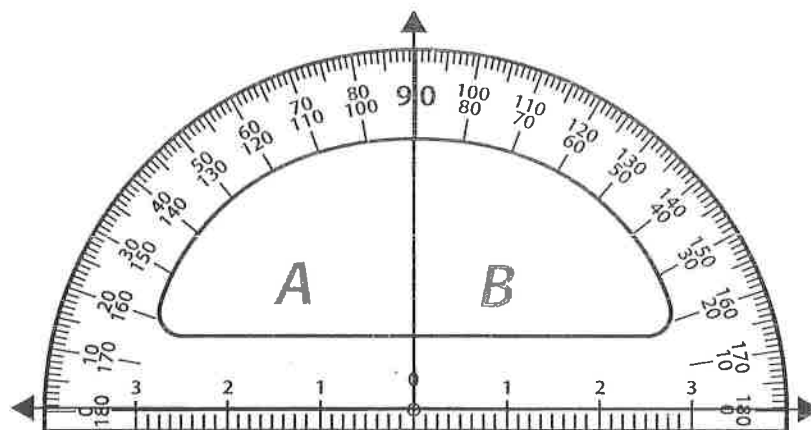
(continued on next page)

NAME _____

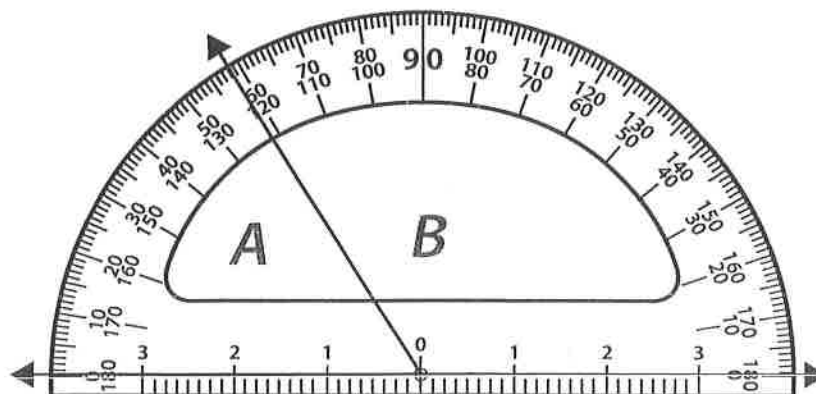
DATE _____

Protractor Practice page 2 of 2**3** The measure of angle A is _____ degrees.

The measure of angle B is _____ degrees.

**4** The measure of angle A is _____ degrees.

The measure of angle B is _____ degrees.

**5** Go back and add each pair of angle measures in Problems 1 through 4. What do you notice? Why do you think it works this way?