

NAME _____

| DATE _____




Pattern Block Symmetries

For each of the shapes below:


- Decide whether the shape has any lines of symmetry
- Draw in all the lines of symmetry you can find

1




isosceles trapezoid

2



equilateral triangle

3




rhombus

4



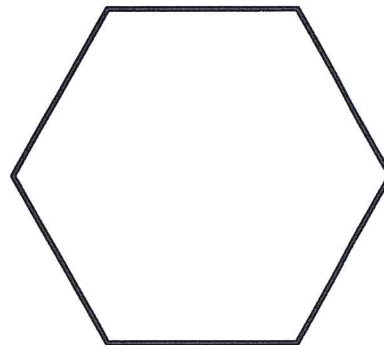
rhombus

5



square

6



regular hexagon