




NAME _____

DATE _____

Multiplying with Money

1 Use the arrays of coins to help solve each multiplication problem below. Show all our work.

ex	$\begin{array}{r} 12 \\ \times 5 \\ \hline 60 \end{array}$		$\begin{array}{l} 5¢ \times 4 = 20¢ \\ 5¢ \times 4 = 20¢ \\ 5¢ \times 4 = 20¢ \end{array}$	$\begin{array}{r} 20 \\ 20 \\ + 20 \\ \hline 60 \end{array}$
a	$\begin{array}{r} 15 \\ \times 5 \\ \hline \end{array}$			
b	$\begin{array}{r} 21 \\ \times 5 \\ \hline \end{array}$			

2 **CHALLENGE** Solve the multiplication problems below. Show all your work.

<p>a</p> $\begin{array}{r} 62 \\ \times 5 \\ \hline \end{array}$	<p>b</p> $\begin{array}{r} 63 \\ \times 5 \\ \hline \end{array}$
---	---