

NAME _____

DATE _____




Design a Floor Pattern page 1 of 3


Note to Families

This Home Connection combines math and design. Students use their creativity to design a pattern and then practice computation to determine how much it would cost to make that pattern in tiles.

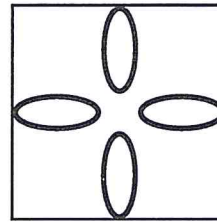
- 1 Choose one of the two Floor Plans: Floor Plan 1 below or Floor Plan 2 on the back of this page. (If you really enjoy this project, you can do both.)
- 2 Draw one of the following 3 tile designs in each square on your floor plan. Do not use the same design for every square.



Tile A




Tile B



Tile C

- 3 Answer questions 1–6 on the worksheet.

Floor Plan 1



(continued on next page)

NAME _____

DATE _____

Design a Floor Pattern page 2 of 3

Floor Plan 2

(continued on next page)


NAME _____

DATE _____

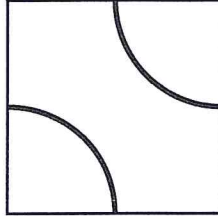
Design a Floor Pattern page 3 of 3

Calculating the Costs of Your Floor Pattern(s)

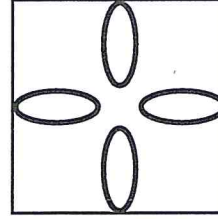
Here is the cost of each tile.



Tile A: 25 cents



Tile B: 50 cents



Tile C: 1 dollar

Use your floor plan(s) and the information above to answer the questions below (Remember, you only have to do one of the floor plans, not both.)

Question	Floor Plan 1	Floor Plan 2
1 How many tiles did you need for the floor plan you chose?		
2 How many of each tile did you use in your design of the floor plan?	a	a
	b	b
	c	c
3 How much money did all the A tiles cost?		
4 How much money did all the B tiles cost?		
5 How much money did all the C tiles cost?		
6 How much money did the entire floor pattern cost?		

